



Semester Two Examination, 2016

Question/Answer Booklet

**MATHEMATICS
SPECIALIST
UNITS 1 AND 2**

**Section Two:
Calculator-assumed**

If required by your examination administrator, please
place your student identification label in this box

Student Number: In figures

--	--	--	--	--	--	--	--

In words

Your name

Time allowed for this section

Reading time before commencing work: ten minutes

Working time for section: one hundred minutes

Materials required/recommended for this section

To be provided by the supervisor

This Question/Answer Booklet

Formula Sheet (retained from Section One)

To be provided by the candidate

Standard items: pens (blue/black preferred), pencils (including coloured), sharpener, correction fluid/tape, eraser, ruler, highlighters

Special items: drawing instruments, templates, notes on two unfolded sheets of A4 paper, and up to three calculators approved for use in the WACE examinations

Important note to candidates

No other items may be taken into the examination room. It is **your** responsibility to ensure that you do not have any unauthorised notes or other items of a non-personal nature in the examination room. If you have any unauthorised material with you, hand it to the supervisor **before** reading any further.

Structure of this paper

Section	Number of questions available	Number of questions to be answered	Working time (minutes)	Marks available	Percentage of exam
Section One: Calculator-free	7	7	50	55	35
Section Two: Calculator-assumed	13	13	100	104	65
Total				157	100

Instructions to candidates

- The rules for the conduct of Trinity College examinations are detailed in the *Instructions to Candidates* distributed to students prior to the examinations. Sitting this examination implies that you agree to abide by these rules.
- Write your answers in this Question/Answer Booklet.
- You must be careful to confine your response to the specific question asked and to follow any instructions that are specified to a particular question.
- Spare pages are included at the end of this booklet. They can be used for planning your responses and/or as additional space if required to continue an answer.
 - Planning: If you use the spare pages for planning, indicate this clearly at the top of the page.
 - Continuing an answer: If you need to use the space to continue an answer, indicate in the original answer space where the answer is continued, i.e. give the page number. Fill in the number of the question that you are continuing to answer at the top of the page.
- Show all your working clearly.** Your working should be in sufficient detail to allow your answers to be checked readily and for marks to be awarded for reasoning. Incorrect answers given without supporting reasoning cannot be allocated any marks. For any question or part question worth more than two marks, valid working or justification is required to receive full marks. If you repeat any question, ensure that you cancel the answer you do not wish to have marked.
- It is recommended that you **do not use pencil**, except in diagrams.
- The Formula Sheet is **not** to be handed in with your Question/Booklet.

Section Two: Calculator-assumed

65% (104 Marks)

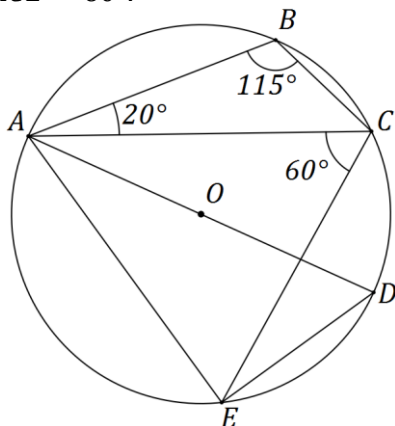
This section has **thirteen (13)** questions. Answer **all** questions. Write your answers in the spaces provided.

Working time for this section is 100 minutes.

Question 8

(5 marks)

Points B , C and E lie on the circle with diameter AOD as shown below. $\angle ABC = 115^\circ$, $\angle BAC = 20^\circ$ and $\angle ACE = 60^\circ$.



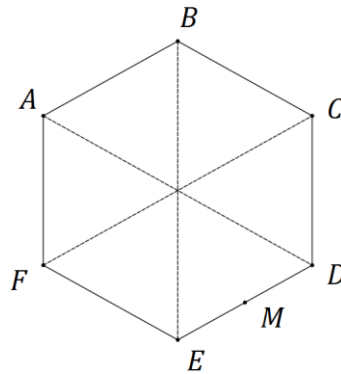
Determine the size of the following angles.

- (a) $\angle ADE$. (1 mark)
- (b) $\angle EAD$. (1 mark)
- (c) $\angle AEC$. (1 mark)
- (d) $\angle CAD$. (1 mark)
- (e) $\angle CED$. (1 mark)

Question 9

(8 marks)

(a) $ABCDEF$ is a regular hexagon. The midpoint of side DE is M .



Let $\mathbf{a} = \overrightarrow{AB}$ and $\mathbf{b} = \overrightarrow{AF}$. Express each of the following in terms of \mathbf{a} and \mathbf{b} .

(i) \overrightarrow{BC} . (1 mark)

(ii) \overrightarrow{AE} . (1 mark)

(iii) \overrightarrow{MB} . (2 marks)

(b) Three forces, F_1 , F_2 and F_3 act on a body that remains in equilibrium.

F_1 has a magnitude of 400 N. The angle between the directions of F_1 and F_2 is 150° , between F_1 and F_3 is 135° and between F_2 and F_3 is 75° .

Determine the magnitudes of F_2 and F_3 .

(4 marks)

Question 10

(8 marks)

- (a) A number is to be formed by randomly selecting three **different** digits from those in the number 93265. Determine how many different numbers
- (i) start with an odd digit. (1 mark)

 - (ii) end with an even digit. (1 mark)

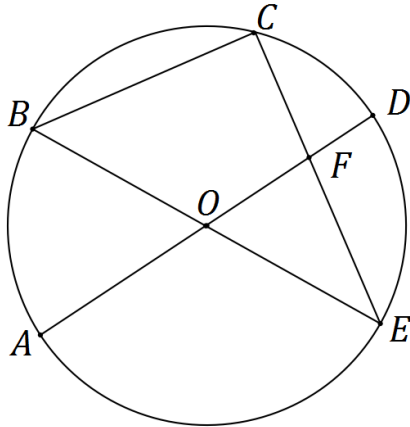
 - (iii) start with an odd digit or end in an even digit. (2 marks)
- (b) A computer user has forgotten their six character, case-sensitive password, but know that they always use a permutation of F, F, 1, 9, 9, and 9 - their initials and the year they were born. Determine how many passwords are possible if
- (i) the Fs must both be uppercase. (2 marks)

 - (ii) either F can be lowercase or uppercase. (2 marks)

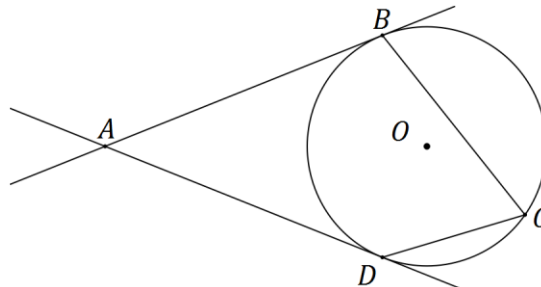
Question 11

(8 marks)

- (a) Triangle BCE is such that B , C and E lie on a circle with centre O and radius 29 cm. Diameter AD and chord CE intersect at F , so that $DF = 8.5$ cm and $EF = 25.5$ cm. Determine the lengths OF , CF and BC . (5 marks)



- (b) In the diagram below, points B , C and D lie on a circle with centre O . The tangents to the circle at B and D intersect at point A . If $\angle BAD = x$, prove that $\angle BCD = 90^\circ - \frac{x}{2}$. (3 marks)



Question 12

(10 marks)

Transformation A is an anti-clockwise rotation about the origin of 90° and matrix $B = \begin{bmatrix} 2 & 0 \\ 0 & 3 \end{bmatrix}$.

(a) Represent transformation A as a 2×2 matrix. (2 marks)

(b) Describe the transformation represented by matrix B . (2 marks)

(c) Determine the coordinates of the point $P(-15, -11)$ following transformation A and then transformation B . (3 marks)

- (d) Following transformation B and then transformation A , point Q is transformed to point $Q'(12, 7)$.

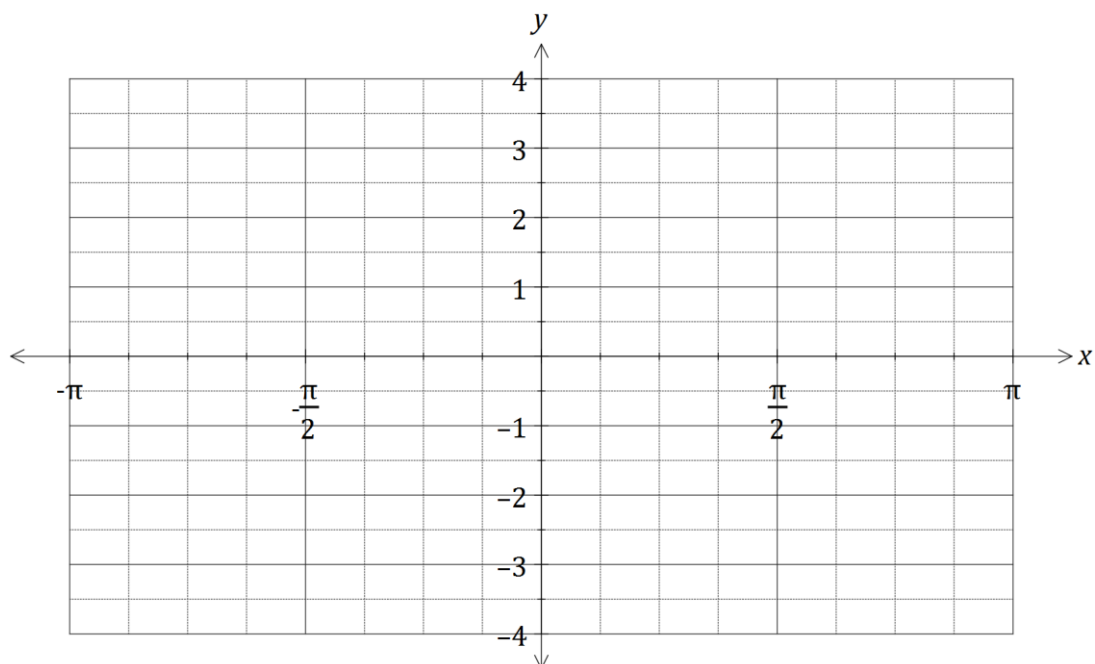
Determine the single matrix that will transform Q' back to Q and hence determine the coordinates of point Q . (3 marks)

Question 13

(8 marks)

(a) On the axes below sketch the graph of $y = \frac{1}{2} \sec\left(x - \frac{\pi}{2}\right)$.

(3 marks)



(b) Consider the function $f(t) = 2 \sin t - 5 \cos t$, $t \geq 0$.

(i) $f(t)$ can be expressed in the form $r \sin(t - \alpha)$, where $r > 0$ and $0 \leq \alpha \leq \frac{\pi}{2}$.
Determine the values of r and α , rounded to 2 decimal places. (3 marks)

(ii) Hence or otherwise determine the minimum value of $f(t)$ and the smallest value of t for this minimum to occur. (2 marks)

Question 14

(9 marks)

(a) Consider the vectors $\mathbf{p} = 24\mathbf{i} - 143\mathbf{j}$ and $\mathbf{q} = 20\mathbf{i} - 21\mathbf{j}$. Determine

(i) the angle between the directions of vectors \mathbf{p} and \mathbf{q} . (1 mark)

(ii) two vectors that are perpendicular to \mathbf{q} and have the same magnitude as \mathbf{p} . (4 marks)

(b) If $\overrightarrow{AB} = \begin{pmatrix} 3 \\ 4 \end{pmatrix}$ and $\overrightarrow{AC} = \begin{pmatrix} -2 \\ 1 \end{pmatrix}$, determine

(i) the vector projection of \overrightarrow{AB} on to \overrightarrow{AC} . (2 marks)

(ii) the component of \overrightarrow{AB} perpendicular to \overrightarrow{AC} . (2 marks)

Question 15

(9 marks)

(a) Express the recurring decimal $1.1\overline{58}$ as a rational number. (3 marks)

(b) Use a counterexample to explain why the statement $(\forall x \in \mathbb{Z})(\exists y \in \mathbb{Z})(2xy = 24)$ is false. (2 marks)

(c) Prove, by contradiction, that $\sqrt{6}$ is irrational. (4 marks)

Question 16

(7 marks)

(a) Let the angle $\theta = \frac{\pi}{3} - \frac{\pi}{4} = \frac{\pi}{12}$.

(i) Use your calculator to write down an exact value for $\sin\left(\frac{\pi}{12}\right)$. (1 mark)

(ii) Use an angle sum or difference identity to show how to obtain the above exact value for $\sin\left(\frac{\pi}{12}\right)$. (3 marks)

(b) Prove the identity $\sin x + \sin 2x + \sin 3x = (1 + 2 \cos x) \sin 2x$. (3 marks)

Question 17

(10 marks)

Trapezium $OPQR$ has parallel sides PQ and OR such that $|\overrightarrow{OR}| = k|\overrightarrow{PQ}|$. Let $\overrightarrow{OP} = \mathbf{a}$ and $\overrightarrow{PQ} = \mathbf{b}$.

(a) Sketch the trapezium. (1 mark)

(b) Determine vectors for \overrightarrow{OQ} and \overrightarrow{PR} in terms of k , \mathbf{a} and \mathbf{b} . (2 marks)

(c) Show that the scalar product of \overrightarrow{OQ} and \overrightarrow{PR} is $k|\mathbf{b}|^2 - |\mathbf{a}|^2 + (k - 1)\mathbf{a} \cdot \mathbf{b}$. (3 marks)

(d) Simplify your result from (c) if $k = 1$, $\mathbf{a} = \mathbf{i} + 4\mathbf{j}$ and $\mathbf{b} = 3\mathbf{i} - 2\sqrt{2}\mathbf{j}$. (2 marks)

(e) Explain the geometric significance of your result from (d). (2 marks)

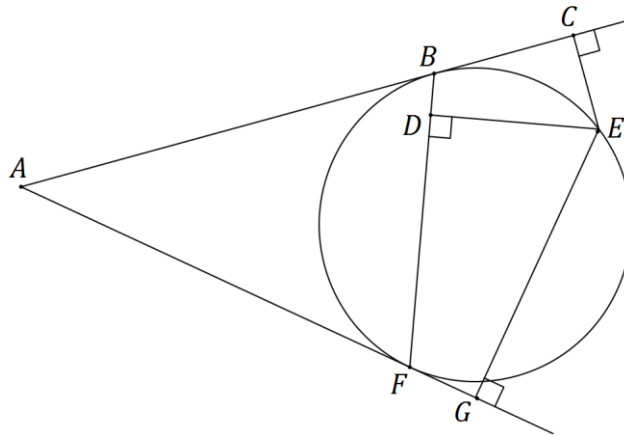
Question 18

(7 marks)

- (a) The work done, in joules, by a force \mathbf{F} Newtons in changing the displacement of an object \mathbf{s} metres is given by the scalar product of \mathbf{F} and \mathbf{s} . Calculate the work done when a force of 750 N moves an object a distance of 85 cm at an angle of 5° to the force.
- (2 marks)

- (b) John is riding his jet ski travelling with velocity $\begin{pmatrix} 50 \\ -40 \end{pmatrix}$ km h⁻¹. To John, the wind appears to be coming from a bearing of 049° at 22 km h⁻¹. Determine the true speed of the wind.
- (5 marks)

In the diagram below, the tangents from point A touch the circle at B and F . Point E lies on the major arc BF and D lies on BF so that $DE \perp BF$. Points C and G lie on AB and AF extended respectively such that $EC \perp AC$ and $EG \perp AG$.



(a) Show that $\triangle BCE$ and $\triangle FDE$ are similar. (3 marks)

(b) Show that $DE^2 = CE \times GE$. (4 marks)

Question number: _____

© 2016 WA Exam Papers. Trinity College has a non-exclusive licence to copy and communicate this paper for non-commercial, educational use within the school. No other copying, communication or use is permitted without the express written permission of WA Exam Papers.